


SUNSHINE MATH-1
Venus, XVII

Name: _____


(This shows my own thinking.)

- ★★★ 1. Find a pattern. How many *more* pennies do you need in order to add three more rows?




Answer: _____ pennies

- ★ 2. Tamika subtracted \$5.00 from \$12.00 on her calculator. She got the answer shown. Circle the sentence below that makes the best sense.



- a. Her calculator may be broken.
- b. Her calculator needs a battery.
- c. Her calculator is working fine.

- ★★ 3. Measure the length of the key. Use an inch ruler.



Answer: _____ inches

- ★ 4. $10 - 9 + 8 - 7 + 6 - 5 + 4 - 3 + 2 - 1 + 0 =$ _____

- ★★★ 5. Next year your older sister will be 12, your brother will be 14 and you will be 7 years old. You have a box of 35 birthday candles. Are there enough candles for the birthday cakes?

Answer: _____ (yes or no)

- ★ 6. Pretend that yesterday was May 5th. Then tomorrow would be May _____.

- ★★★ 7. Rachel got a baby chick for Easter. She made a graph of the chick's weight, in grams, each month.

- How much did the chick gain from April to May? _____ grams
- How much did the chick gain from May to June? _____ grams
- Finish the graph. Show that the chick gained 5 grams each month through October.

