

SUNSHINE MATH-1
Venus, XIX

Name: _____

(This shows my own thinking.)

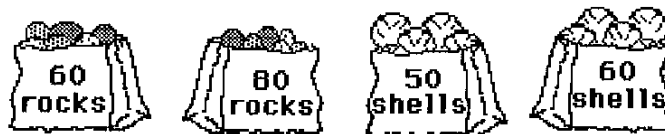
- ★ 1. How many dimes and how many pennies do you need to buy the ice cream sundae?

sundae 41¢
soda 36¢



Answer: _____  's and _____  's

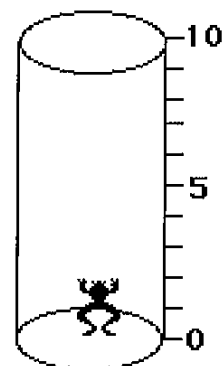
- ★★ 2. Amy bought 20 more rocks than shells. Which two bags did she buy? Circle the bags.



- ★★ 3. Jan tossed three beanbags.
Each beanbag landed on a different number.
Jan's score was 8.
What numbers did the beanbags land on?
Circle them.


1	3
2	4

- ★★★★ 4. A frog fell in a 10-foot deep hole. Starting at 5:00 o'clock, the frog jumped up 3 feet each minute. But he fell back 1 foot while resting for the next jump. What time did the frog get out of the hole? Draw a picture of the frog's trip, to help you.



Answer: The frog got out at _____.

- ★★ 5. Write the numbers and the number sentences. The first is done for you.

Shapes in All:	Remove:	Number Left:	Number Sentence:
	all ▲'s	7	$9 - 2 = 7$
_____	all ●'s	_____	_____
_____	all ■'s	_____	_____
_____	all ■'s and all ●'s	_____	_____

- ★ 6. Draw 5 X's in each box.

--	--

--	--

Draw 4 extra X's.
How many X's in all?

Answer: _____ X's