

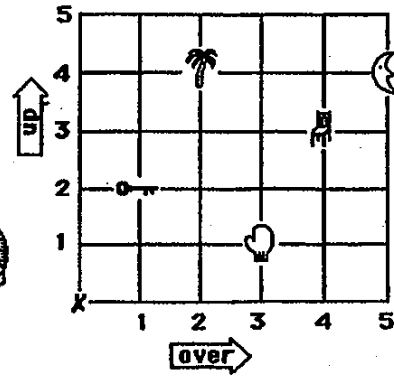

**SUNSHINE MATH - 1**  
**Venus, XXIII**

Name: \_\_\_\_\_

(This shows my own thinking.)

- ★★★★ 1. Help the robot. Tell him how many steps *over*, and how many steps *up*, to find an object. The robot always starts at X.

The first one is done for you in the chart.



To find the:	Go over:	Go up:
tree	2	4
mitten		
chair		
key		
moon		

- ★★ 2. Margo's cat had 4 kittens. Her hamster had 5 baby hamsters. She gave away 3 kittens and 2 hamsters. How many animals did she have left to play with?

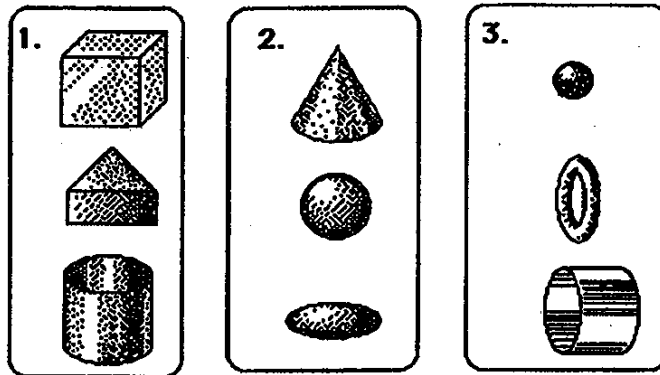
Answer: \_\_\_\_\_

- ★★★★ 3. Put either ¢ or \$ beside each number below. The sentence should make sense, after you are through.

- A new shirt might cost 10 .
- A piece of bubble gum might cost 5 .
- A new pencil might cost 25 .

★★★ 4. Match each picture with the best rule. Write the letter of the rule on the given line. Use each rule only once.

- Rules
- A. They can all roll straight.
  - B. They can all be stacked on top of each other.
  - C. They all have a curved side.



Rule: \_\_\_\_\_ Rule: \_\_\_\_\_ Rule: \_\_\_\_\_

★★★★ 5. Use the number chart to fill in the missing numbers.

1	2	3	4	5	6	7	8	9	10
11	12	13	14	15	16	17	18	19	20
21	22	23	24	25	26	27	28	29	30
31	32	33	34	35	36	37	38	39	40
41	42	43	44	45	46	47	48	49	50

