

SUNSHINE MATH - 2  
Earth, X

Name: \_\_\_\_\_  
(This shows my own thinking.)

- ★ 1. Vilma turned 16 years old in 1995. In what year was she born?

Answer: \_\_\_\_\_

- ★★ 2. Find a number greater than 6,285 and less than 6,582. Use these numbers.

2      5      8      6


Answer: The number is \_\_\_\_\_

- ★★ 3. Look at the graph. Answer both questions.

- a. How many like raspberry?  
\_\_\_\_\_

- b. How many like either lemon or strawberry?  
\_\_\_\_\_

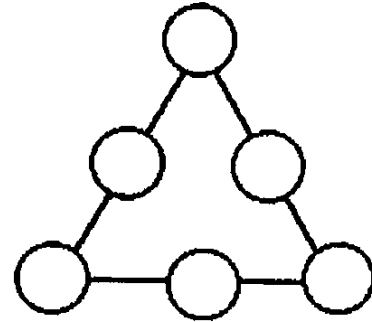
Yogurt Second Graders Like



- ★★★ 4. I am thinking of two numbers that add to twenty-one. One number is 3 more than the other. What are my numbers?

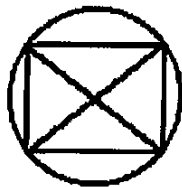
Answer: \_\_\_\_\_ and \_\_\_\_\_

- ★★ 5. Place 1, 2, 3, 4, 5, and 6 in the circles so each side of the triangle has the sum of 11.

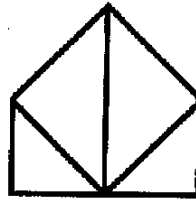


- ★★ 6. Which one of these shapes can be drawn without lifting your pencil or going over the same line twice? Circle it.

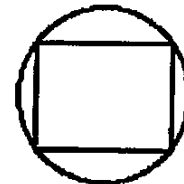
a.



b.

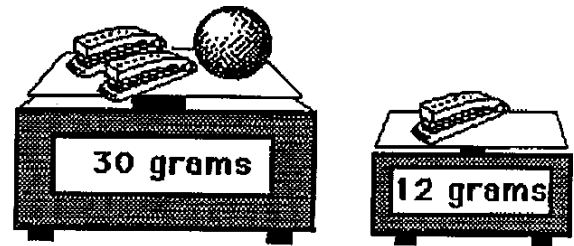


c.



- ★★★★ 7. How much does the ball weigh?

Answer: \_\_\_ grams



- ★★★ 8. Henrique pressed the keys  $\boxed{5}$ ,  $\boxed{=}$ ,  $\boxed{1}$ ,  $\boxed{8}$ , and  $\boxed{+}$  on his calculator, but not in that order. He got the answer 23. What problem did he do?

Henrique's Problem:

\_\_\_\_\_

