


SUNSHINE MATH - 2
Earth, XI

Name: _____

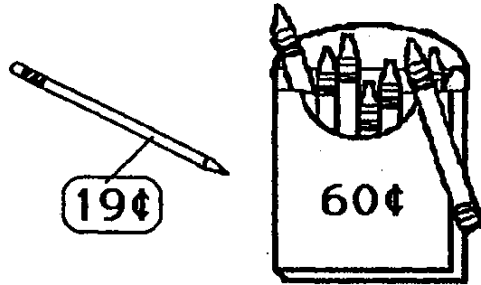
(This shows my own thinking.)

- ★ 1. Sam's dog chewed a hole in his homework. Now he cannot see the numbers in the ones place. Circle the best estimate using the numbers you can see.




about 50 about 30 about 110

- ★★★ 2. Maria has 3 quarters, 1 dime, and 2 nickels. She wants to buy the crayons and pencil. Does she have enough money? Circle your answer.



Answer: yes no

- ★★ 3. If you put a quarter a day into your piggy bank, how much money would you have in a week?



Answer: _____

- ★ 4. Herrick was asked to estimate the answer to this problem. Circle the best estimate below.

600 700 800

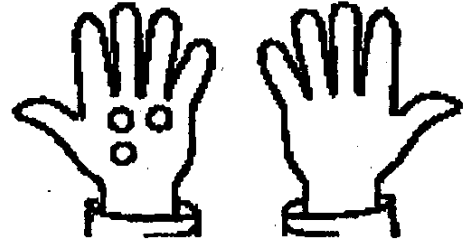
$$\begin{array}{r} 288 \\ + 497 \\ \hline \end{array}$$



★★★ 5. Find the pattern. Fill in each blank.

_____, _____, 69, 71, 73, 75, _____

★★ 6. Draw twice as many rocks in the right hand, as are in the left hand. Now how many more fingers are there, than rocks?



Answer: _____ more fingers

★★★ 7. Use the calendar to answer these questions:

a. Whose birthday is September 17?

b. When is Tim's birthday?

c. Who has a birthday on Monday?

d. How many Fridays are in this month?

September						
Sun	Mon	Tue	Wed	Thur	Fri	Sat
				1	2	3
4	5	6	Jay	8	9	10
11	John	13	14	15	16	Lee
18	19	20	Tim	22	23	24
25	26	27	28	29	30	

★★ 8. What is the starting number?

starting number → add 3 → subtract 5 → 10

Answer: The starting number is _____