

SUNSHINE MATH - 2
Earth, XVIII

Name: _____

(This shows my own thinking.)


- ★★★ 1. Five swans are swimming in a line. Freida is ahead of Margie. Sandra is behind Margie. Billy is between Sandra and Margie. Clint follows Sandra. Label the swans below to show how they are lined up.



- ★ 2. Marita's mom travels to different towns each day. She leaves at 4:00 a.m. and returns at 3:00 p.m. She traveled 50 miles on Monday morning and 20 miles Monday afternoon. How far did she go on Monday?

Answer: _____ miles

- ★★ 3. Use the pencil shown below as your unit of measure. Estimate how tall the figures are to the nearest whole pencil.



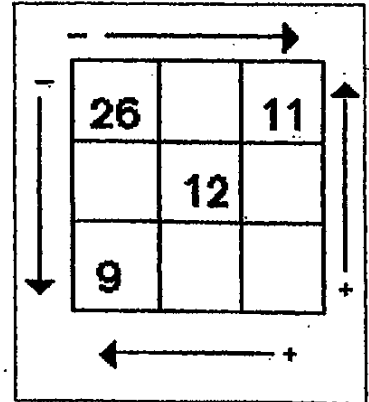
Answers: a _____ pencils b _____ pencils

- ★ 4. I had 34¢. I lost a dime. How much money do I have now?

Answer: _____ ¢

- ★★ 5. Finish filling in the box with numbers by adding and subtracting. Subtract and add in the directions shown by the arrows.

(Hint: In the top row, 15 goes between 26 and 11 since $26 - 15 = 11$.)



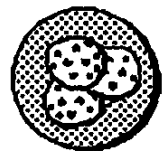
- ★★ 6. A ribbon is 20 inches long. If you cut it with a pair of scissors into one-inch pieces, how many snips would it take?

Answer: _____ snips

- ★★★ 7. Tanya guessed there were 65 beans in a jar. Her guess was off by 20. Bryan guessed there were 35 beans in the jar. He was off by 10. How many beans are in the jar?

Answer: _____ beans

- ★★★ 8. Each cookie has 10 chocolate chips in it. How many chocolate chips are in a box of 25 cookies?



Answer: _____ chocolate chips