

SUNSHINE MATH - 2  
Earth, VII

Name: \_\_\_\_\_  
(This shows my own thinking.)

- ★★ 1. Sandy needed some stickers to give to her friends. Look at the chart below. How much do 6 stickers cost?

Number of Stickers:	1	2	3	4	5	6
Cost:	15¢	30¢	45¢			

Answer: \_\_\_\_\_¢

- ★★★ 2. Look at this circle graph to help answer each question.

How Pablo Spends His Time Each Day

- a. What does Pablo spend the least time doing?


\_\_\_\_\_

- b. What does Pablo spend the most time doing?

\_\_\_\_\_

- c. Does Pablo spend more time eating, or watching TV?

\_\_\_\_\_




- ★ 3. Choose the correct sign: >, =, or < to make this number sentence true. Then circle your answer.

$$16 + 12 \quad \boxed{?} \quad 23 + 4$$

Answer: > = <

- ★ 4. Draw a circle around an *angle* in the scissors below.





- ★★★ 5. Use each number only once. Do each step in order. Cross out the number when it is used.

- Two numbers whose sum is 3
- Two numbers whose sum is 8
- Two numbers whose sum is 12
- Two numbers whose sum is 15

1	2	3
4	5	6
7	8	9

Circle the number left in the puzzle.

- ★★ 6. How many of these →  
would it take to cover  
the grid below?



Answer: \_\_\_\_\_

- ★★ 7. Circle the best estimate for  
the length of the mouse's tail:

- a. 5 centimeters
- b. 10 centimeters
- c. 2 centimeters
- d. 13 centimeters

