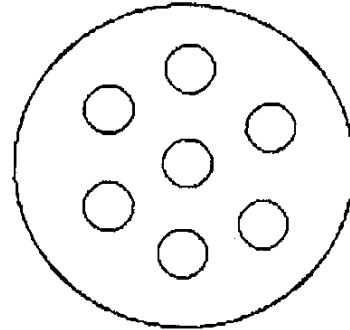



★ 1. _____
(FIRST NAME) (LAST NAME)

★★ 2. How many circles
are there? (Total)



★★★ 3.


Connect 2 dots for a line.



Connect 3 dots for a triangle.



Connect 4 dots for a square.



★★★ 4. Write in the next number.

1 2 3 4 _____

3 4 5 6 _____

5 6 7 8 _____

★★★★ 5. Fill in the missing number in each row.

$$6 \quad 7 \quad 8 \quad 9 \quad \underline{\quad}$$

$$6 \quad \underline{\quad} \quad 8 \quad 9 \quad 10$$

$$6 \quad 7 \quad \underline{\quad} \quad 9 \quad 10$$

$$6 \quad 7 \quad 8 \quad \underline{\quad} \quad 10$$

★★★★ 6. If $A = 1$

$$B = 2$$

$$C = 3$$

$$D = 4$$

$$E = 5$$

$$F = 6$$

then $A+B+C = \underline{\quad}$

(Parents: Reading the problem to your child is ALWAYS okay. If you help them solve the problems, please initial the problem and they will receive partial credit.)